

2803/304

**PATTERN CONSTRUCTION III  
AND GRADING TECHNIQUES II  
PRACTICAL**

Oct./Nov. 2021

Time: 4 hours



**THE KENYA NATIONAL EXAMINATIONS COUNCIL**

**DIPLOMA IN FASHION DESIGN AND CLOTHING TECHNOLOGY  
MODULE III**

**PATTERN CONSTRUCTION III AND GRADING TECHNIQUES II PRACTICAL**

**4 hours**

**INSTRUCTIONS TO CANDIDATES**

1. You should have the following items for this examination:
  - (i)  $\frac{1}{4}$  scale ruler/square;
  - (ii) pencil (2H and eraser;
  - (iii) 30 cm ruler;
  - (iv) French curves;
  - (v) sheets of white photocopying paper (size A4);
  - (vi) a pair of paper scissors;
  - (vii) glue/sellotape;
  - (viii) paper pins;
  - (ix) tracing wheel;
  - (x) tracing paper;
  - (xi) calculator.
  
2.
  - (i) All stages of pattern development must be clearly shown.
  - (ii) All measurements used for grading must be shown at all grading points.

**This paper consists of 5 printed pages.**

**Candidates should check the question paper to ascertain that  
all the pages are printed as indicated and that no questions are missing.**



## TASKS

1. Using the measurements provided, draft the classic waistcoat block. (54 marks)

### Measurements

Chest	104 cm
Natural waist length	45 cm
Scye depth	25.2 cm
Half back	20.5 cm
Neck	42

2. Trace out the flat blocks provided and develop final patterns for the trench coat style sketched below. (89 marks)

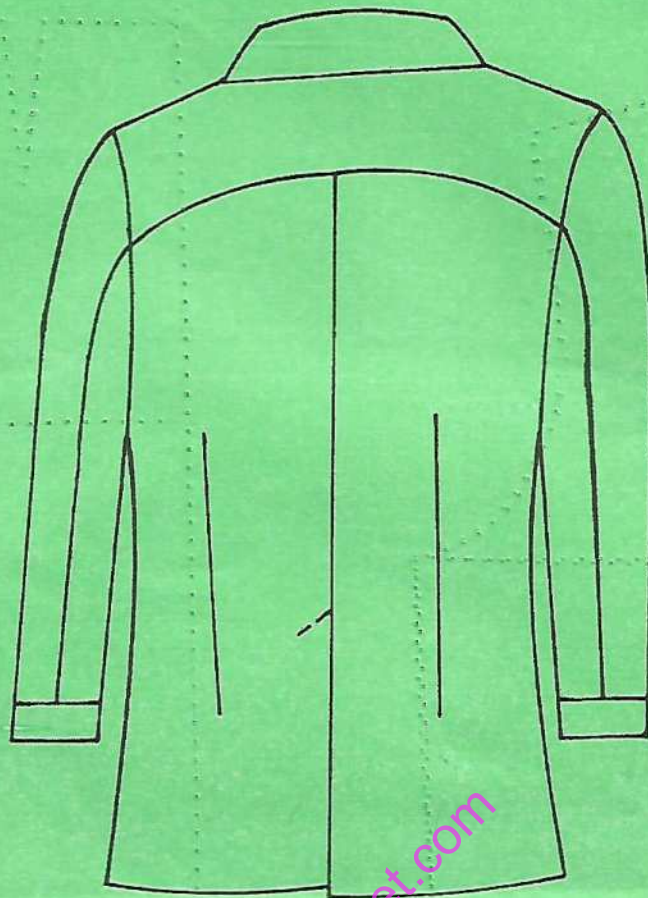
**NB: Omit seam and hem allowances.**

3. Trace out the back casual skirt block and grade one size up. (17 marks)



FRONT VIEW


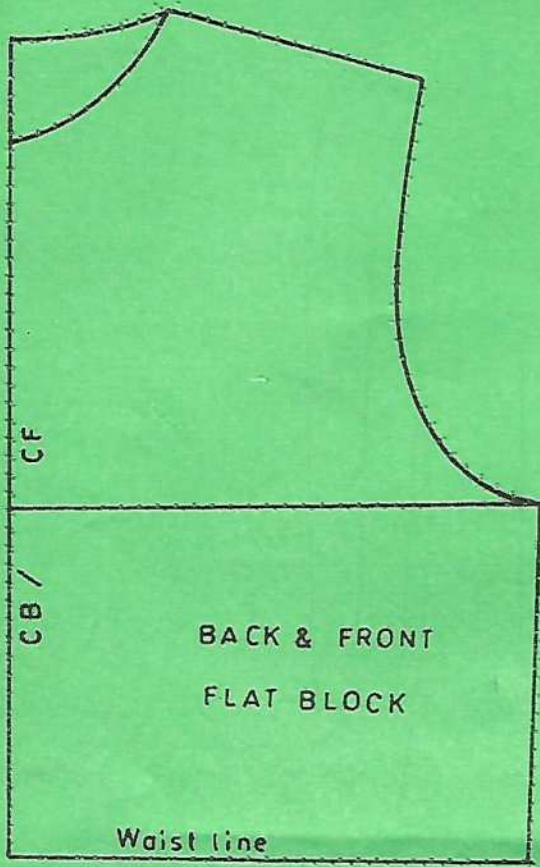




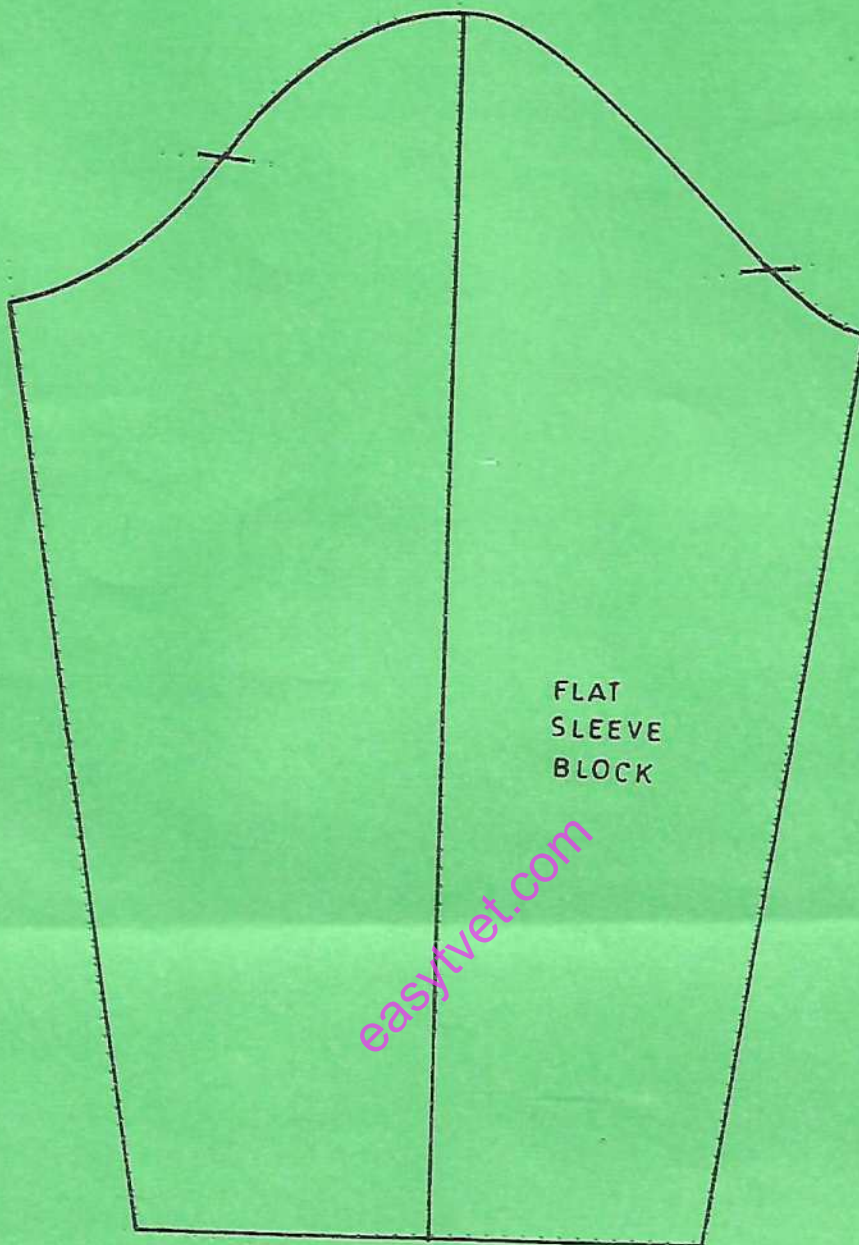
BACK VIEW

[easylivet.com](http://easylivet.com)





easyvet.com



FLAT  
SLEEVE  
BLOCK

easytvet.com

**THIS IS THE LAST PRINTED PAGE.**